

## **ESKON**

Evaluation des compétences scolaires des nouveaux arrivants

## **MATHEMATIQUES**

Série de tâches de 0 à 2 ans d'expérience scolaire

Nom:

Tâches

1

a)

9

4

11

7

8

b)

$$10 + 10 + 10 + 10 + 10 + 2 = 52$$




$$10 + 10 + 10 + 7 =$$

$$10 + 10 + 10 + 10 + 10 + 10 + 4 =$$



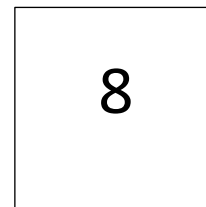



$$10 + 10 + 9 =$$

Nom:

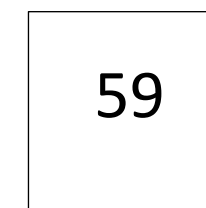

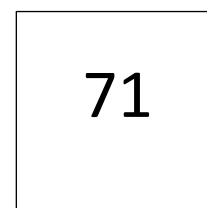
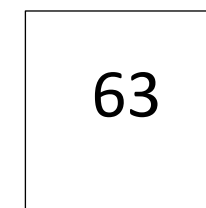

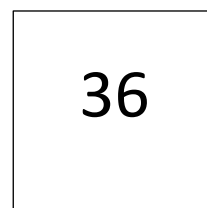
2



a)



b)



Nom:

3

$2 + 2 = \underline{4}$

$\underline{6} - 5 = 1$

$4 + \underline{5} = 7 + 2$

a)

$2 + 5 = \underline{\quad}$

$\underline{\quad} + 3 = 7$

$6 + \underline{\quad} = 9$

$7 + 4 = \underline{\quad}$

$\underline{\quad} + 2 = 11$

$10 + \underline{\quad} = 18$

$6 - 2 = \underline{\quad}$

$\underline{\quad} - 4 = 3$

$9 - \underline{\quad} = 7$

$10 - 7 = \underline{\quad}$

$\underline{\quad} - 4 = 9$

$12 - \underline{\quad} = 3$

b)

$6 + 2 = \underline{\quad} + 4$

$9 - \underline{\quad} = 7 - 4$

$20 + 7 = 10 + \underline{\quad}$

$\underline{\quad} + 5 = 16 - 5$

$6 \cdot 3 = \underline{\quad}$

$4 \cdot \underline{\quad} = 32$

$\underline{\quad} \cdot 2 = 14$

$\underline{\quad} \cdot \underline{\quad} = 25$

$2 \cdot 9 = \underline{\quad} + 9$

$7 \cdot 8 = \underline{\quad} \cdot 7$

Nom:

4

a)

1 m = \_\_\_ cm

1 h = \_\_\_ min

2 m = \_\_\_ cm

2 h = \_\_\_ min

b) Au total, combien cela fait de francs ?

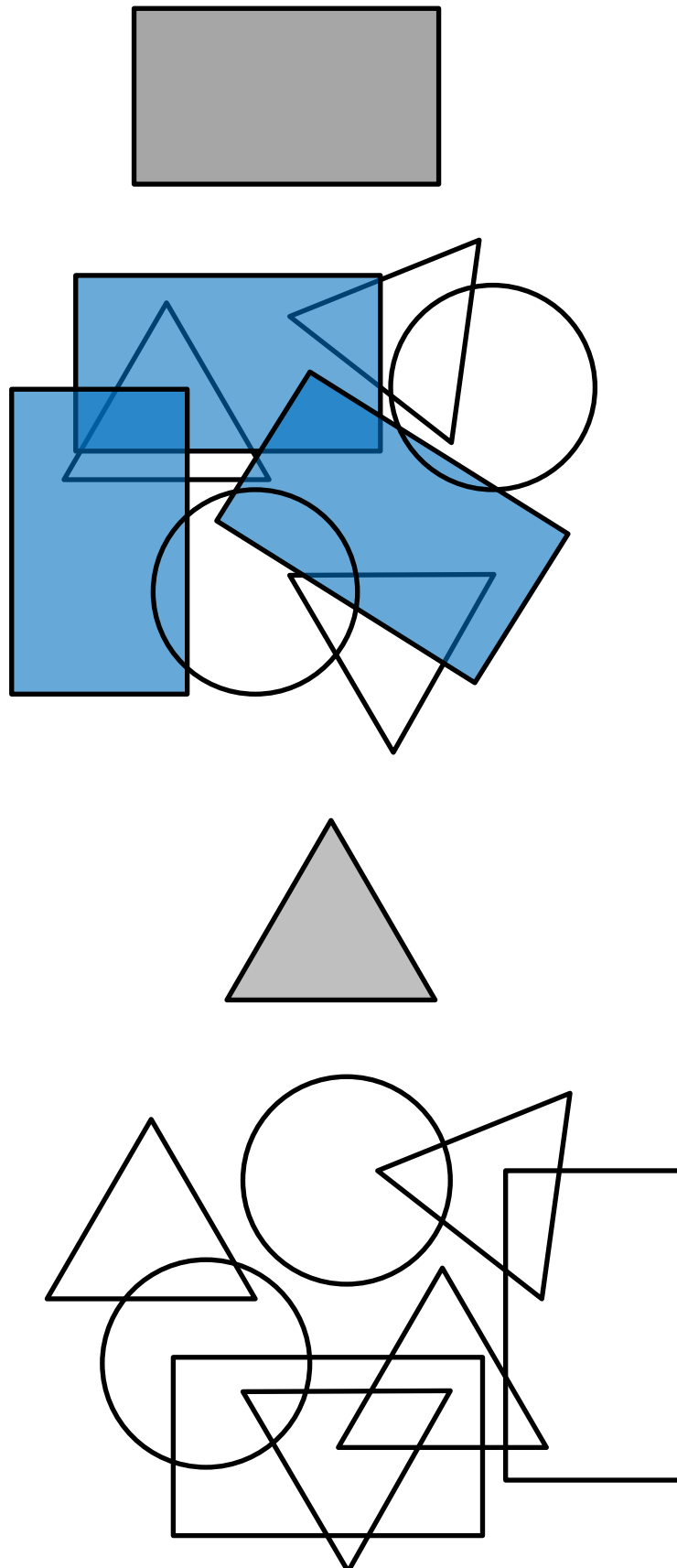


Total \_\_\_\_\_ Fr.

Nom:

5

a)



Nom:

b)

