



ESKON

Evaluation des compétences scolaires des nouveaux arrivants

MATHEMATIQUES

Série de tâches de 5 à 6 ans d'expérience scolaire

Nom:

Tâches

1

a)

$$400 + 3 = 300 + 103$$

$$500 + 4 = 104 + \underline{\quad}$$

$$200 + 50 = 100 + \underline{\quad}$$

$$500 + 8 = 50 + \underline{\quad}$$

$$600 + 3 = 400 + \underline{\quad}$$

$$300 + 90 = 190 + \underline{\quad}$$

Nom:

b)

$$333 + 3'003 + 30 = \underline{3'366}$$

$$5'000 + 700 + 920 = \underline{\hspace{2cm}}$$


$$300 + 60 + 57 = \underline{\hspace{2cm}}$$

$$4'000 + 1'300 + 820 = \underline{\hspace{2cm}}$$

$$6'060 + 606 + 60 = \underline{\hspace{2cm}}$$

Nom:

2



309.2

>

302.9

a)

604.1

64.88

7.009

7.02

99.99

99.990

Nom:

b)

$8 \cdot 200$

$20 \cdot 80$

$77 \cdot 11$

$22 \cdot 33$

$22 \cdot 22$

$200 \cdot 2$

Nom:

3

$$67 - 38 = \underline{29} \quad \underline{3.8} + 3.5 = 7.3 \quad 12 \cdot \underline{9} = 108$$

a)

$$78 + 35 = \underline{\quad} \quad \underline{\quad} + 30 = 700 \quad 480 + \underline{\quad} = 909$$

$$600 - 102 = \underline{\quad} \quad \underline{\quad} - 400 = 313 \quad 812 - \underline{\quad} = 7$$

$$12 \cdot 6 = \underline{\quad} \quad 3 \cdot \underline{\quad} = 363 \quad \underline{\quad} \cdot 8 = 432$$

$$98 : 7 = \underline{\quad} \quad 600 : \underline{\quad} = 12 \quad \underline{\quad} : 5 = 15$$

b)

$$3.5 + 3.05 = \underline{\quad} \quad 0.4 + 2.66 = \underline{\quad} \quad 0.99 + 0.9 = \underline{\quad}$$

$$10 - 1.01 = \underline{\quad} \quad 1.5 - 0.82 = \underline{\quad} \quad 0.2 - 0.02 = \underline{\quad}$$

$$1.1 \cdot 0.5 = \underline{\quad} \quad 0.2 \cdot 0.2 = \underline{\quad} \quad 40 \cdot 0.4 = \underline{\quad}$$

$$100 : 0.2 = \underline{\quad} \quad 16 : 80 = \underline{\quad} \quad 0.5 : 0.25 = \underline{\quad}$$

Nom:

4

$$800 \text{ cm} = \underline{8} \text{ m}$$

a)

$$3'500 \text{ cm} = \underline{\quad\quad} \text{ m}$$

$$600 \text{ s} = \underline{\quad\quad} \text{ min}$$

$$1 \text{ h} = \underline{\quad\quad} \text{ s}$$

$$22'000 \text{ g} = \underline{\quad\quad} \text{ kg}$$

b)

$$4 \text{ m} + 30 \text{ cm} = \underline{\quad\quad} \text{ m}$$

$$6 \text{ m} - 2 \text{ cm} = \underline{\quad\quad} \text{ m}$$

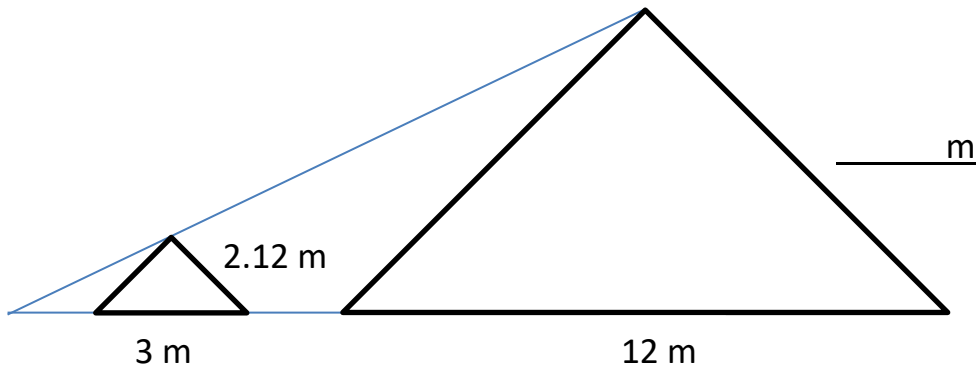
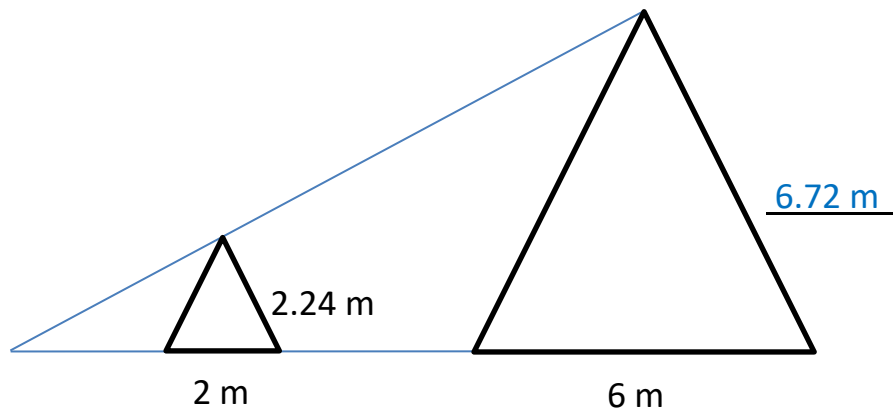
$$15.50 \text{ Fr.} + 13.85 \text{ Fr.} = \underline{\quad\quad} \text{ Fr.}$$

$$18.30 \text{ Fr.} + \underline{\quad\quad} \text{ Fr.} = 50.00 \text{ Fr.}$$

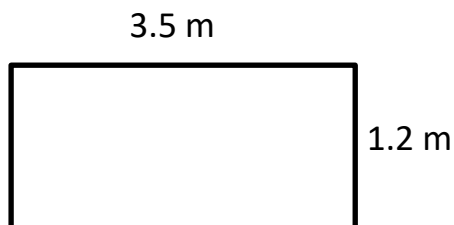
Nom:

5

a)



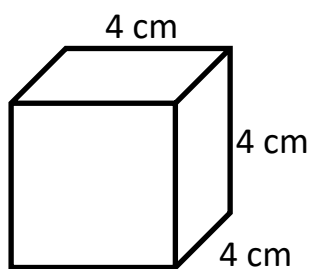
b)



Surface = _____ m²

Périmètre = _____ m

c)



Aire = _____ cm²

Volume = _____ cm³